







Monster Line-Up







The pupils in Class 3 at Monster High are all different heights. Cut out each monster. Draw a number line and put each monster in the appropriate place on your number line.

					
1.1m	2.1m	1.8m	0.9m	0.6m	1.6m

Complete the statements by writing < or > in each box.

0.6m <input type="text"/> 1.1m	1.1m <input type="text"/> 0.9m	1.8m <input type="text"/> 0.6m
2.1m <input type="text"/> 1.8m	1.6m <input type="text"/> 2.1m	0.9m <input type="text"/> 1.6m

Class 4 at Monster High have measured themselves more accurately. Cut out each monster and draw another number line to place these monsters on.

					
1.32m	1.05m	1.97m	1.50m	1.76m	1.18m

Complete the statements by writing < or > in each box.

1.97m <input type="text"/> 1.32m	1.50m <input type="text"/> 1.76m	1.50m <input type="text"/> 1.05m
1.18m <input type="text"/> 1.05m	1.97m <input type="text"/> 1.18m	1.76m <input type="text"/> 1.32m